

Nombre: _____

1. Completa los números que faltan:

1		3	4	5	6		8	9	10
11		13	14		16	17	18		20
21	22		24	25	26		28	29	30
31	32	33	34	35	36	37	38	39	

2. Ordena de menor a mayor:

12 - 8 - 5 - 9 - 20 - 27

--	--	--	--	--	--

32 - 18 - 25 - 9 - 40 - 27

--	--	--	--	--	--

3. Completa

$1 + 2 = \underline{\quad}$

$2 - 1 = \underline{\quad}$

$4 + 5 = \underline{\quad}$

$4 - 2 = \underline{\quad}$

$2 + 3 = \underline{\quad}$

$3 - 3 = \underline{\quad}$

$3 + 3 = \underline{\quad}$

$5 - 3 = \underline{\quad}$

$1 + 4 = \underline{\quad}$

$5 - 4 = \underline{\quad}$

$6 + 4 = \underline{\quad}$

$4 - 4 = \underline{\quad}$

$1 + \underline{\quad} = 6$

$5 - \underline{\quad} = 5$

$2 + \underline{\quad} = 6$

$4 - \underline{\quad} = 2$

$2 + 4 = \underline{\quad}$

$7 - 4 = \underline{\quad}$

$4 + 4 = \underline{\quad}$

$5 - 4 = \underline{\quad}$

4. Relaciona con flechas:

$10 + 4$

16



$10 + 3$

14



$10 + 1$

18



$10 + 8$

13

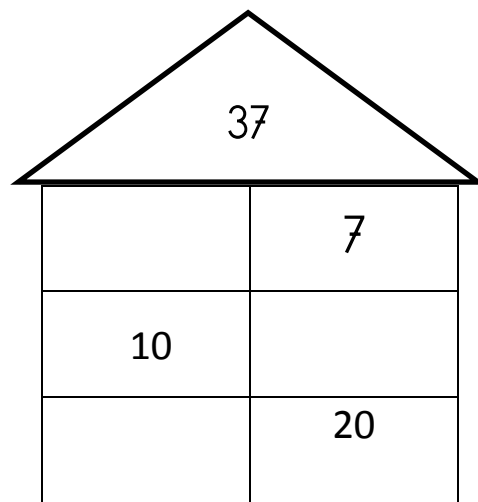
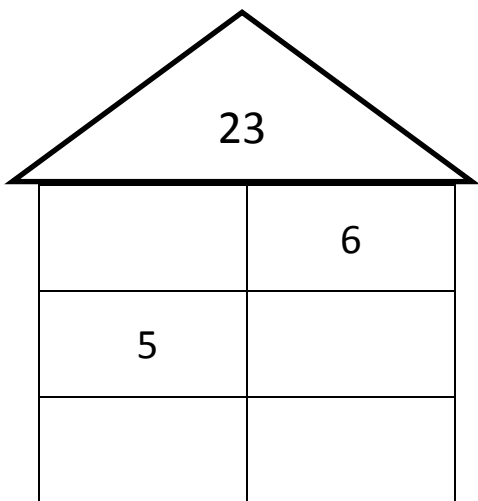
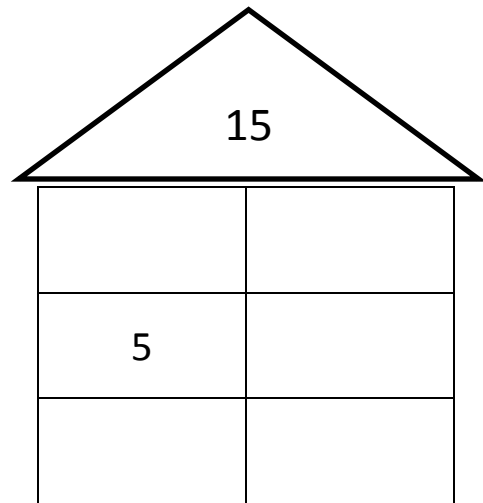
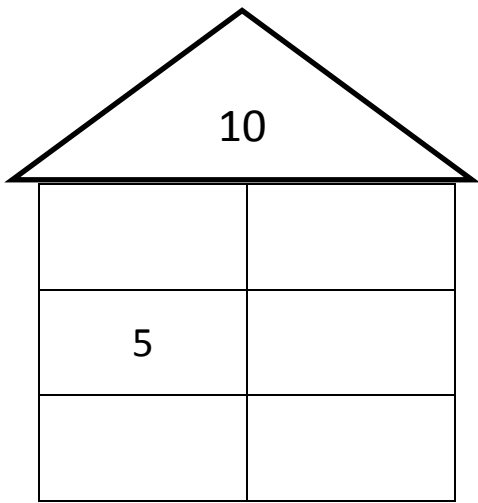


$10 + 6$

11



7. Completa las casitas:



8. Dibuja las decenas y unidades que necesitas:

